




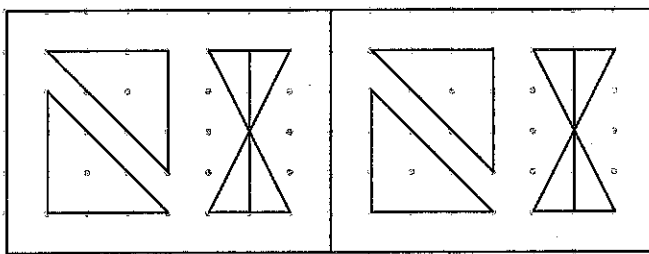
1 Trace les triangles demandés par les robots en utilisant ton équerre.



Trace un triangle rectangle.



2 Continue la frise.



3 Le défi de Robotine !

Tu dois construire 1 triangle.

- Trace le segment  $[AB]$  de 7 cm.
- À partir du point B, trace le segment  $[BC]$  de 5 cm.
- Trace le triangle ABC.

